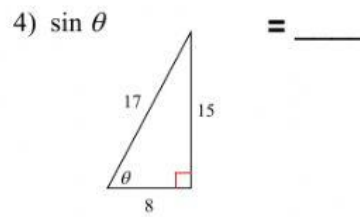
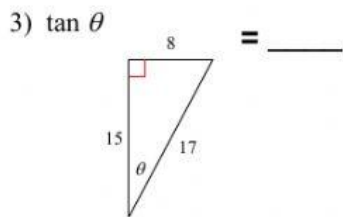
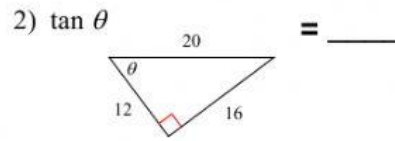
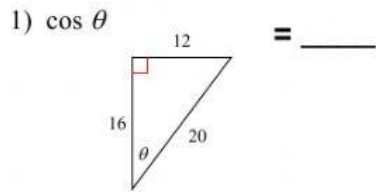
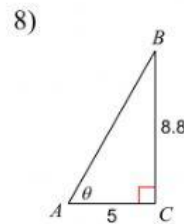
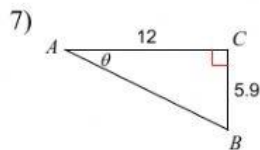
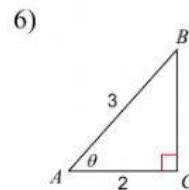
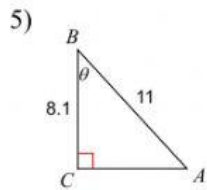


Trigonometry Review

Find the value of the trig function indicated.

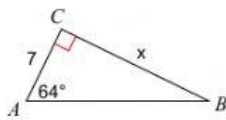


Find the measure of each angle indicated. Round to the nearest hundredth.

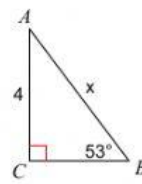


Find the measure of each side indicated. Round to the nearest hundredth.

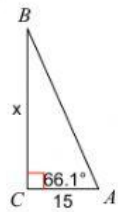
9)



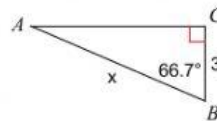
10)



11)

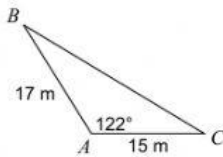


12)

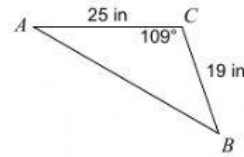


Find each measurement indicated. Round your answers to the nearest hundredth.

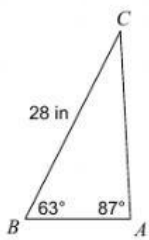
13) Find BC



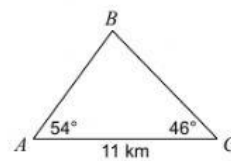
14) Find AB



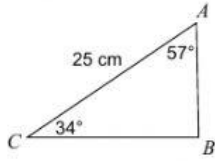
15) Find AC



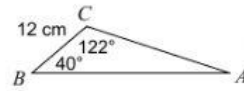
16) Find BC



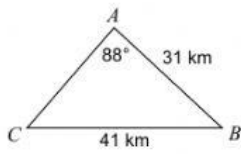
17) Find BC



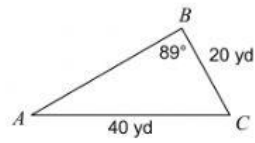
18) Find AB



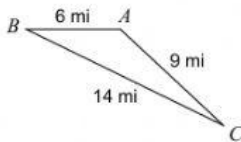
19) Find $m\angle C$



20) Find $m\angle A$



21) Find $m\angle A$



22) Find $m\angle C$

