





Name:

Date: Monday, May 17, 2020

Subject: Reading and Comprehension

Count. Then, complete the tally chart.



Type of vegetable	Tally marks	Number
 Cabbage		
 Tomato	1	6
 Bell pepper	1 1	
 Onion	1	

Answer the following questions.

1. There are _____ cabbages.
2. There are _____ tomatoes.
3. There are _____ bell peppers.
4. There are _____ onions.
5. There is _____ more bell pepper than onions.
6. There are _____ fewer cabbages than bell peppers.
7. There are _____ vegetables altogether.