

Learning Outcomes: Line Segments and Shapes

Question 1:

Is this a point, line or ray ?



Question 2:

What is this ?



Question 3:

What is this ?



Question 4:

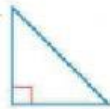
What is this ?



Question 5:

Which picture shows a right angle ?

a)



b)



c)



Question 6:

Which picture shows an angle that is less than a right angle?

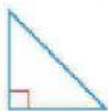
a)



b)



c)



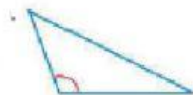
Question 7:

Which picture shows an angle that is more than a right angle?

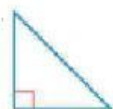
a)



b)

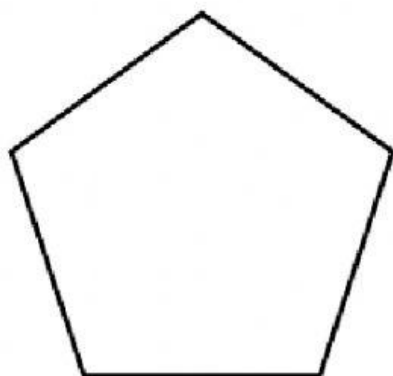


c)



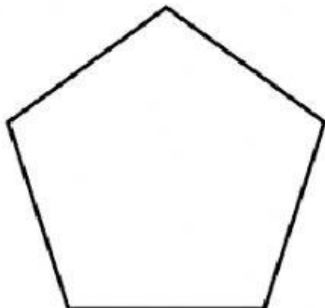
Question 8:

What shape is this?



Question 9:

How many sides does a pentagon have ?



Question 10:

How many angles does a pentagon have ?

