



# LIFE INTERNATIONAL SCHOOL

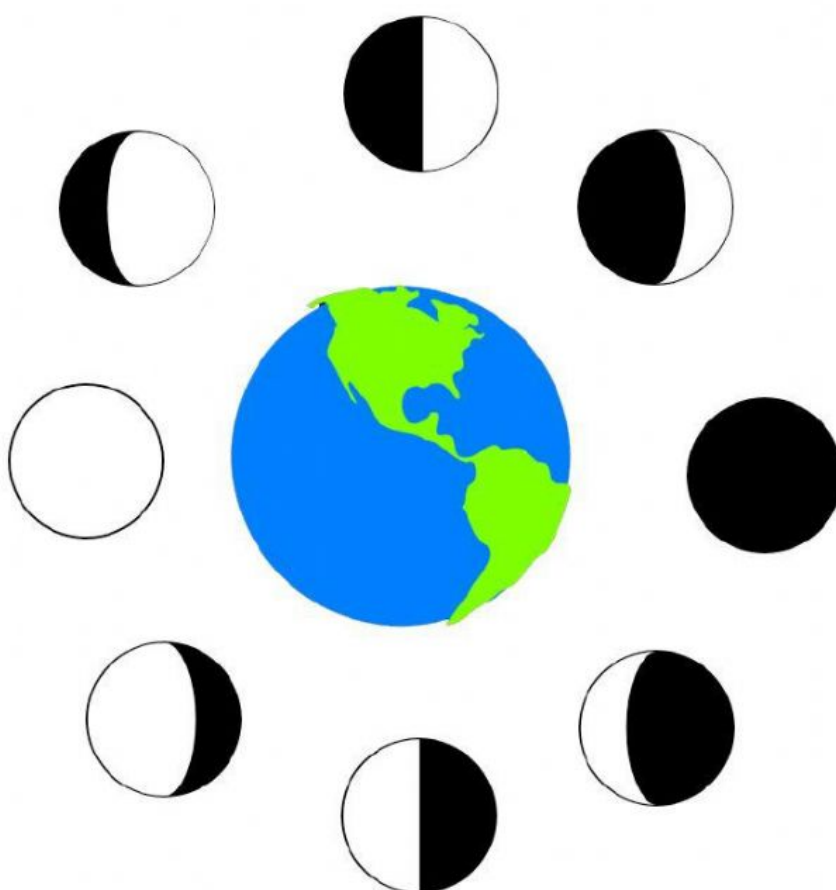
## QUARTER 4 EXAM IN SCIENCE

Grade 1B

Name: \_\_\_\_\_ Date: \_\_\_\_\_ Score: \_\_\_\_ / 45

### Phases of the Moon

Label the phases of the moon- Use the word box to help you.



first quarter

waxing crescent

full moon

waning gibbous

last quarter

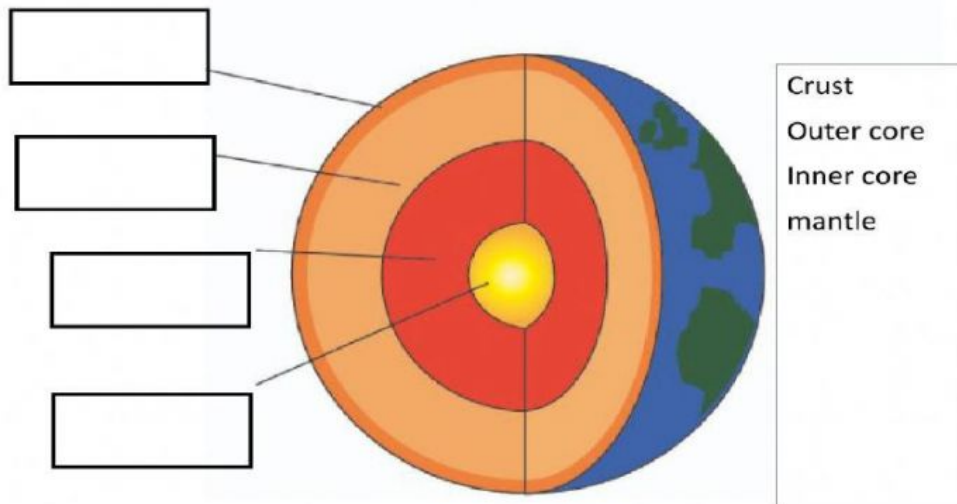
new moon

waning crescent

waxing gibbous

## Layers of the Earth

Label the diagram- Use the word box to help you.



## Natural Resources

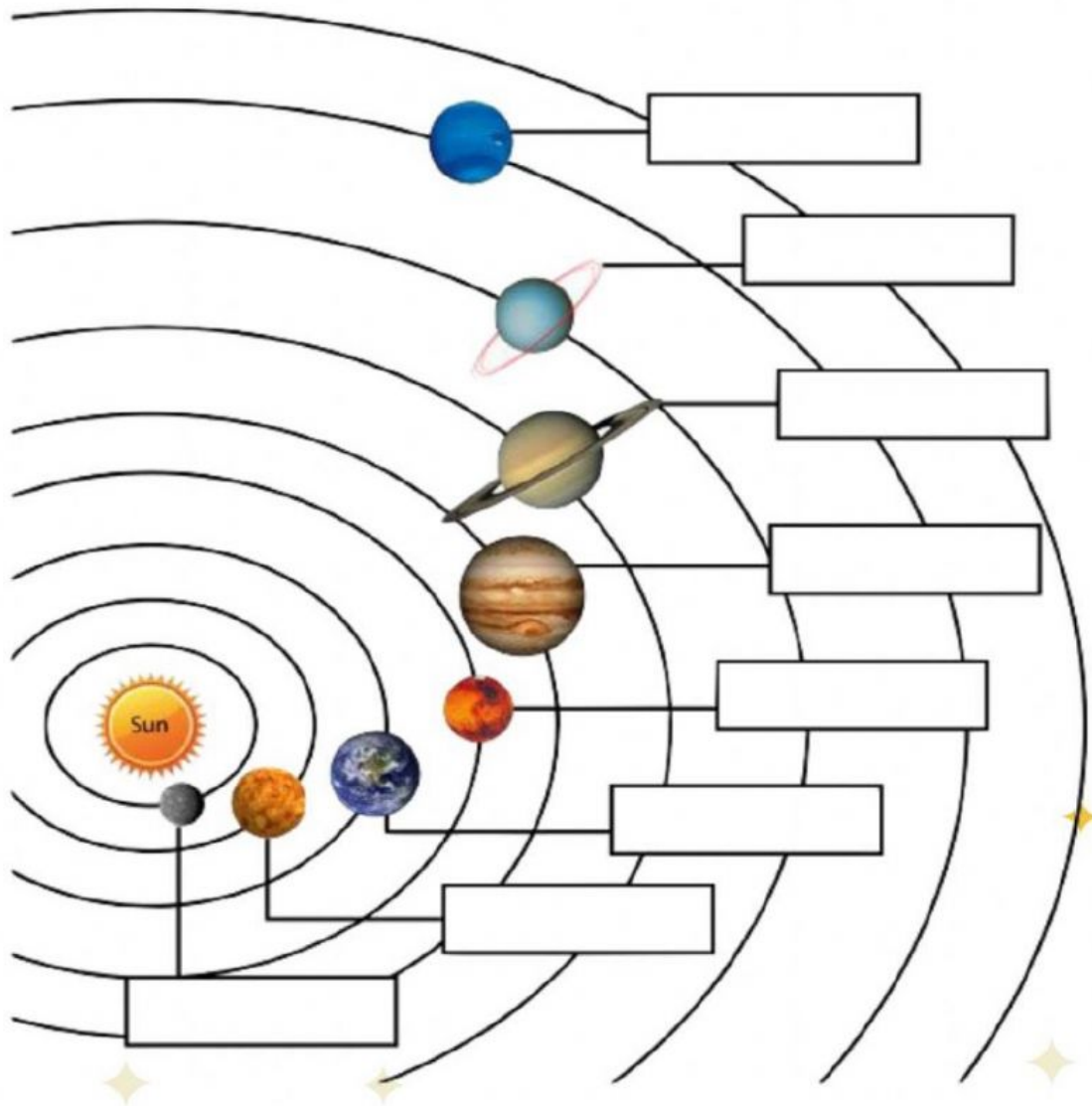
Choose the correct word to makes the sentence true.

1. A natural resource is something from Earth that people \_\_\_\_\_.
2. Soil and rocks are \_\_\_\_\_ resources.
3. People use \_\_\_\_\_ in many ways. People drink water.
4. All living things need \_\_\_\_\_.
5. \_\_\_\_\_ is the top layer of Earth.

## Order the Planets

Identify the planets. Drag and drop their names.

Jupiter - Mercury - Earth - Venus - Mars - Saturn -  
Neptune - Uranus



### How Are Animals Grouped?

mammals	plants	birds
clouds	fish	people
reptiles	amphibians	

1. \_\_\_\_\_
2. \_\_\_\_\_
3. \_\_\_\_\_
4. \_\_\_\_\_
5. \_\_\_\_\_

**God Bless You!**