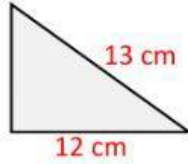
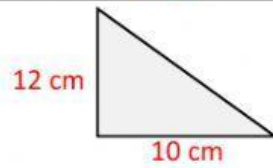


Aplicación del teorema de Pitágoras

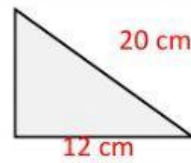
Relaciona las columnas, escribiendo dentro del cuadro correspondiente la letra de la respuesta para cada una de las preguntas mostradas. (Algunos resultados están redondeados a 3 cifras significativas)



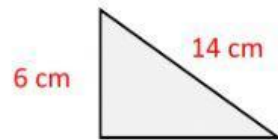
A. 6 cm



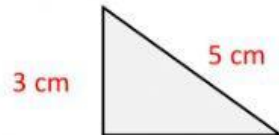
B. 16 cm



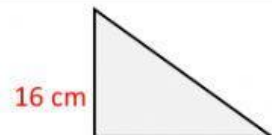
C. 17 cm



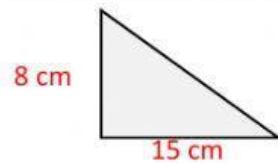
D. 5 cm



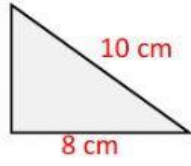
E. 15.6 cm



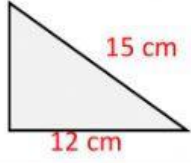
F. 4 cm



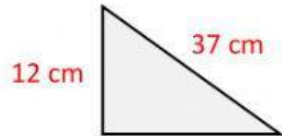
G. 35 cm



H. 12.6 cm



I. 65 cm



J. 9 cm