





















This is how the children came to school on a Monday.

Each symbol shows how one child got to school.

| | | | | | | | |
|------|---|---|---|---|--|---|---|
| Walk |  |  |  |  |  |  |  |
| Car |  |  |  |  |  |  | |
| Bike |  |  |  |  | | | |
| Bus |  |  |  | | | | |

1) How many children walked to school? _____

2) How many children can by bike? _____

3) How many children came by car? _____

4) How many children can on the school bus? _____

5) How many children did not walk? _____

6) How did most children come to school that day?