

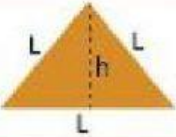



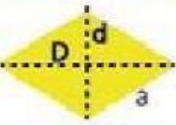


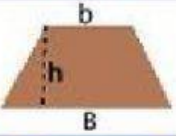
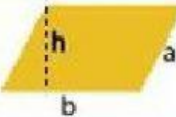
NOMBRE: _____

FECHA: _____

VALOR: _____

FRASE: _____

1.- Une la figura con su fórmula.

Dibujo	Nombre
	Triángulo
	Cuadrado
	Rectángulo
 $\pi = 3,1416$	Círculo
	Rombo
	Pentágono
	Hexágono
	Trapecio
	Paralelogramo

$$A = \frac{D \times d}{2}$$

$$A = b \times a$$

$$A = b \times h$$

$$A = \pi \times r^2$$

$$A = \frac{P \times a}{2}$$

$$A = \frac{(B \times b) \times h}{2}$$

$$A = \frac{b \times h}{2}$$

$$A = L \times L$$

$$A = L^2$$