
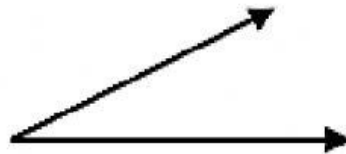


Identifying Angles



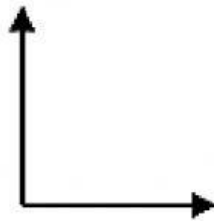
Directions: Identify the following angles.

1



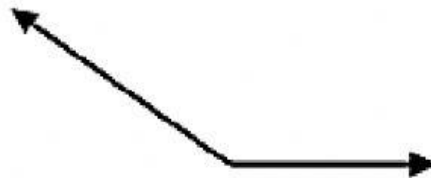
- a. Right Angle b. less than right angle c. greater than right angle

2



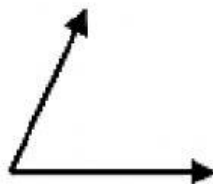
- a. Right Angle b. greater than right angle c. less than right angle

3



- a. Right Angle b. less than right angle c. greater than right angle

4



- a. Right Angle b. greater than right angle c. less than right angle