








Comparing angles with right angles

Grade 3 Geometry Worksheet

Are the following angles are less than right angle ,greater than right angle or right angle ?

| | | | |
|--|--|---|---|
|  |  |  |  |
| greater than right angle less than right angle | less than right angle right angle | less than right angle greater than right angle | less than right angle right angle |
|  |  |  | |
| greater than right angle right angle | right angle greater than right angle | less than right angle greater than right angle | |