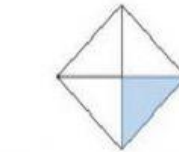

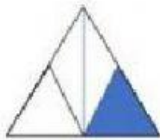


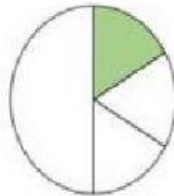
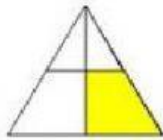



Revision

Fraction and Decimals


1. Recognise Fractions

Click the diagrams which show one over four.



2. Write Fractions

Match the Fractions and write in words.



$$\frac{1}{3}$$

$$\frac{2}{10}$$

$$\frac{2}{5}$$

$$\frac{3}{8}$$

$$\frac{5}{8}$$