



LIFE INTERNATIONAL SCHOOL

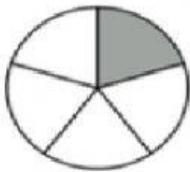
QUARTER 4 EXAM IN MATH

Grade 1B

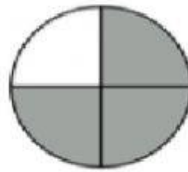
Name: _____ Date: _____ Score: ____ / 45

FRACTIONS

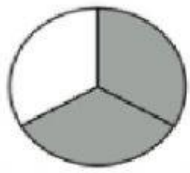
What is the fraction of the shaded part?



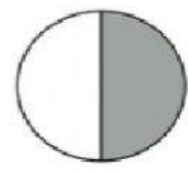
$\frac{1}{5}$



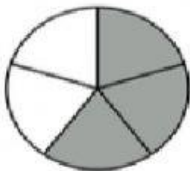
—



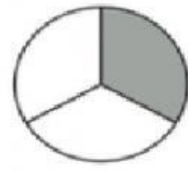
—



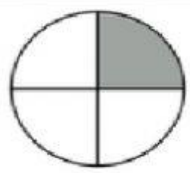
—



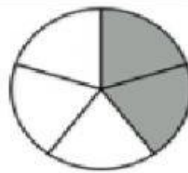
—



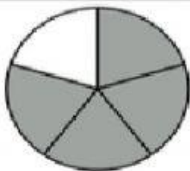
—



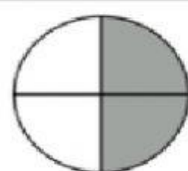
—



—



—



—

Addition with Carrying

$$\begin{array}{r} 34 \\ + 38 \\ \hline \end{array}$$

$$\begin{array}{r} 45 \\ + 26 \\ \hline \end{array}$$

$$\begin{array}{r} 82 \\ + 18 \\ \hline \end{array}$$

$$\begin{array}{r} 38 \\ + 42 \\ \hline \end{array}$$

Subtraction with Borrowing

$$\begin{array}{r} 98 \\ - 79 \\ \hline \end{array}$$


$$\begin{array}{r} 96 \\ - 77 \\ \hline \end{array}$$

$$\begin{array}{r} 98 \\ - 69 \\ \hline \end{array}$$

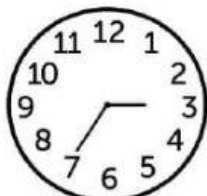
$$\begin{array}{r} 53 \\ - 49 \\ \hline \end{array}$$

What time is it?


INSTRUCTIONS: Write the time below each clock.




:



:



:



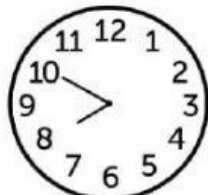
:




:



:

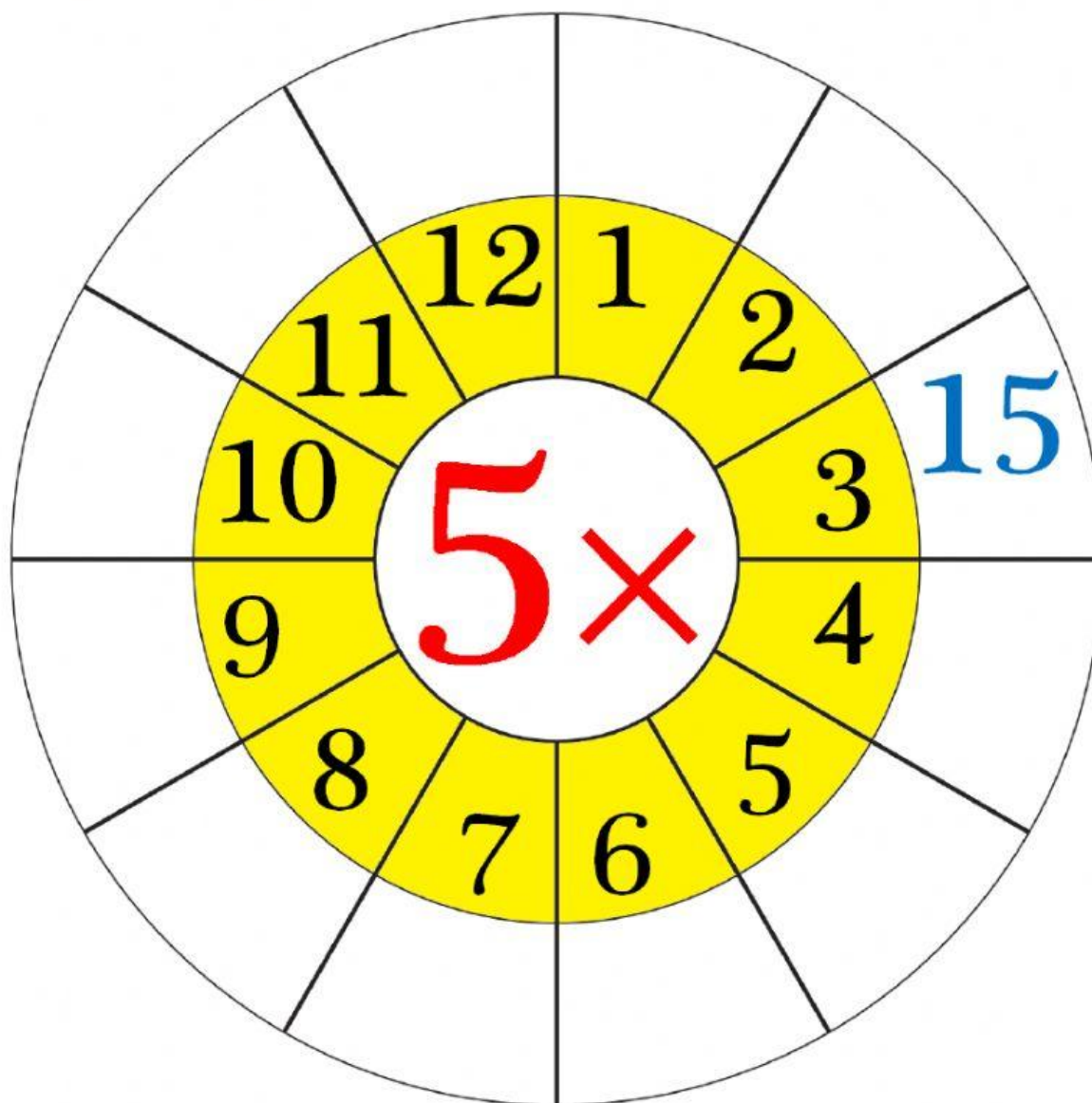


:



:

Multiplication by 5



God Bless You!