

JARGALAN INTERNATIONAL SCHOOL PROGRESSION TEST 2nd grade

Name:.....

Section A


term 3

1. Write the numbers to the right places. /3p/

- 1 It's windy.
- 2 It's sunny.
- 3 It's hot.
- 4 It's cloudy.
- 5 It's snowy.
- 6 It's cold.
- 7 It's rainy.



2. Match the minibeasts to their correct habitat. /3p/



3. Look at the words ? Which one is a natural light source ? /1P/

A. Torch

B. Sun

C. Candle

4. Look at the picture and select the correct opinion. /2p/

3.



a. Rough

b. Smooth

4.



a. Trasnparent

b. Trasnlucuent

5.



a. Soft

b. Hard

6.



a. Smooth

b. Soft

5. Tick the correct answer. /2p/



metal



wood



plastic



wood



glass



wood



6. Circle the shadow of boy. /1p/



7. Which of these is a correct shadow ? Circle the correct answer. /1p/


a.



b.



c.



39. 1

8. Look, read and complete. / morning, rotation, night, earth / /2p/

c. The goes around the sun.

d. The earth's causes day and night.

e. I sleep at and wake up in the .

9. What can you see ? Tick the correct picture. /1p/

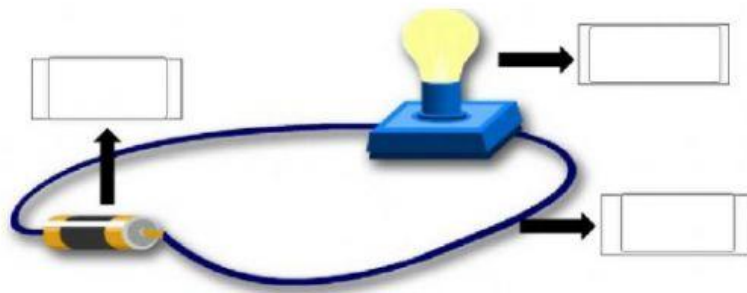
DAY




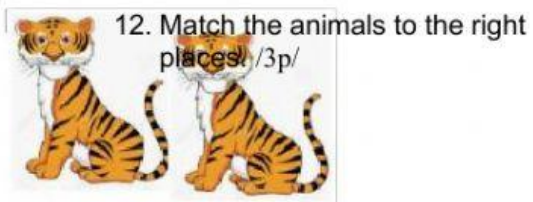
NIGHT



10. Label the components of a simple circuit. /battery, wire, bulb / /2p/



11. Label the part of the earth which is in daytime and which is in nighttime. /1p/



13. Look at the picture and select the correct opinion. /2p/



a. Flexible

b. Rigid



a. Soft

b. Hard



a. Rough

b. Smooth



a. Transparent

b. Translucent



14. Look, read and complete. / moon, day, stars, sun, earth / /2p/

a. The shines during the .

b. At night, we can see and .

c. The goes around the sun.

15. Look at the pictures match the objects into the correct box. /2p/

 CHANGES WITH LIGHT		CHANGES WITH HEAT 	
<input type="text"/>	<input type="text"/>	<input type="text"/>	<input type="text"/>



Ice cream



Bike Wheel



News paper



Plastic straws