

E. M. AYRTON SENNA.

NITERÓI: 19 DE MAIO DE 2021.



PROFESSORA: NEIDEMAR.

TURMA: GR 1A.

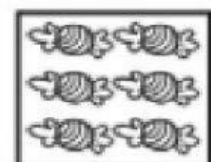
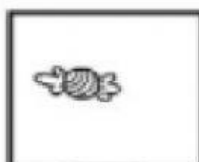
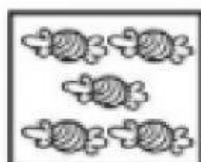
NOME E SOBRENOME:

VAMOS SOMAR?

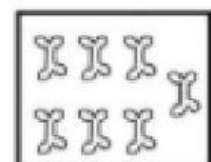
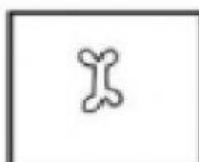
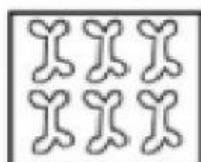

O BEBÊ TINHA 4 CHUPETAS E GANHOU MAIS UMA.
QUANTAS ELE TEM AGORA?



BRUNOTINHA 5 BALAS E GANHOU MAIS UMA.
QUANTAS ELE TEM AGORA?






O CACHORRO TINHA 6 OSSOS E GANHOU MAIS UM.
QUANTOS ELE TEM AGORA?







CASCÃO E CEBOLINHA POSSUEM MUITOS BRINQUEDOS.
VAMOS CONTAR QUANTOS TIPOS DE BRINQUEDOS HÁ NA
ESTANTE E, EM SEGUIDA, COMPLETAR AS OPERAÇÕES?







a)  +  =



f)  +  =



b)  +  =

g)  +  =

c)  +  =

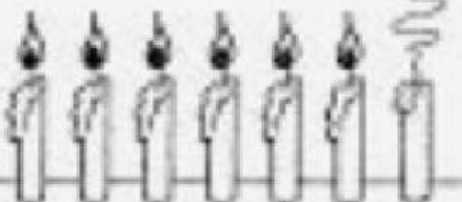





h)  +  =

d)  +  =

i)  +  =

6, 0, 4, 0, 5, 6, 3, 8, 5, 0, 2, 14, 5, 9, 4, 2, 6

- AGORA É A VEZ DE SUBTRAIR.

 $7 - 1 = \square$	 $6 - 2 = \square$
 $9 - 2 = \square$	 $9 - 4 = \square$
 $7 - 4 = \square$	 $5 - 2 = \square$