


Name _____

Math - Probability

Let's Play Marbles


Directions: Identify the probability for each question.



More Likely

Less Likely

1. What is the probability of pulling a black marble out of the bag?



More Likely

Less Likely

2. What is the probability of pulling a white marble out of the bag?




More Likely

Less Likely


3. What is the probability of pulling a black and white marble out of the bag?



How likely are you to grab a ?

More likely Less likely



How likely are you to grab a ?

More likely Less likely