




















NAME: _____

DATE _____

PICTOGRAPH

The pictograph below shows the number of vehicles in a parking complex.

Key:  represents **20 vehicles**

Vehicle	No. of vehicles	Total
Ford	    	
Mazda	   	
Mercedes		
Kia	  	
Nissan	     	

Fill in the blanks with the correct answers.

1. Complete the Total column for the pictograph.
2. How many Mercedes are in the complex? _____
3. _____ has the most number of vehicles.
4. There are _____ more Kia than Mercedes.
5. Altogether there are _____ vehicles in the parking complex.