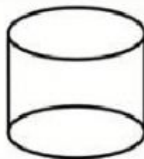

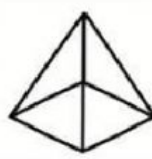
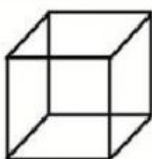
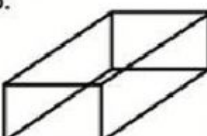






Name: _____

2-D or 3-D?

Directions: Look at the pictures below. Are they 2-dimensional (flat) or 3-dimensional (solid)? Write 2-D or 3-D under the correct pictures.

1. 	2. 	3. 
<hr/> <hr/> <hr/>	<hr/> <hr/> <hr/>	<hr/> <hr/> <hr/>
4. 	5. 	6. 
<hr/> <hr/> <hr/>	<hr/> <hr/> <hr/>	<hr/> <hr/> <hr/>
7. 	8. 	9. 
<hr/> <hr/> <hr/>	<hr/> <hr/> <hr/>	<hr/> <hr/> <hr/>