



## Multiples of Ten

### Packing Orders

Help Sandy fill marble orders. Show how many of each bag to use.



1. This order is for **70** marbles.

   bags of 10 marbles.  
 bags of 20 marbles.

Number Sentence

---



2. This order is for **50** marbles.

   bags of 10 marbles.  
 bags of 20 marbles.

Number Sentence

---

3. This order is for **10** marbles.

   bags of 10 marbles.  
 bags of 20 marbles.

Number Sentence

---

4. This order is for 40 marbles.



bags of 10 marbles.

bags of 20 marbles.

Number Sentence

---

5. Show another way to fill 40 marbles.



bags of 10 marbles.

bags of 20 marbles.

Number Sentence

---

6. This order is for 60 marbles.



bags of 10 marbles.

bags of 20 marbles.

Number Sentence

---

7. This order is for 50 marbles.



bags of 10 marbles.

bags of 20 marbles.

Number Sentence

---