




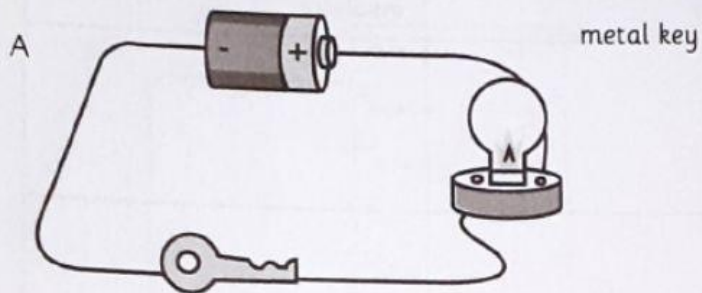
Worksheet 5.1a

Electrical conductors and insulators

Name: _____ Date: _____

Will the bulb light up in each of the following circuits?

Write YES or NO alongside each drawing.



Worksheet 5.3b

Identifying conductors and insulators

Name: _____ Date: _____

Complete the following table.

Object or substance	If I put this object or substance in an electric circuit will the bulb light up? Yes/No	Is the object a conductor or an insulator?
plastic button		
glass marble		
salt water		
chalk		
brass button		
iron nail		
wax crayon		
pure water		
aluminium baking tray		
plastic comb		