



1. Use the verbs in the correct form to complete the organs' functions.

ABSORB – HELP – PUMP – PROTECT - CONTROL

- a) The **brain** \_\_\_\_\_ thoughts, memory and other organs.
- b) The **heart** \_\_\_\_\_ blood around the body.
- c) The **stomach** \_\_\_\_\_ to digest food.
- d) The **intestines** \_\_\_\_\_ nutrients from food.
- e) The **skin** \_\_\_\_\_ and contains to other organs.


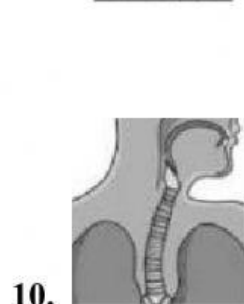
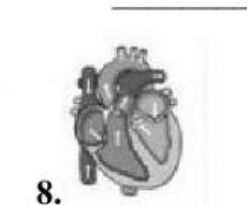

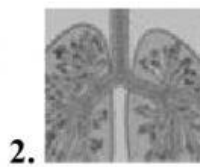

2. Write the number of the body system the picture refers to.

1 – circulatory

3 – reproductive

2 – respiratory

4 – digestive / excretory



3. Find the picture and write the number.

- a) blood cells \_\_\_\_\_
- b) reproduce \_\_\_\_\_
- c) heart \_\_\_\_\_
- d) food \_\_\_\_\_
- e) fertilised egg \_\_\_\_\_
- f) excretory system \_\_\_\_\_
- g) windpipe \_\_\_\_\_
- h) alveoli \_\_\_\_\_
- i) circulatory system \_\_\_\_\_
- j) digestive system \_\_\_\_\_
- k) embryo \_\_\_\_\_
- l) female reproductive system \_\_\_\_\_