

Worksheet 2

Simple machines

1. Place the name of each simple machine under its image.

wheel

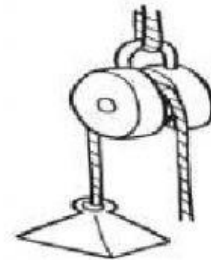
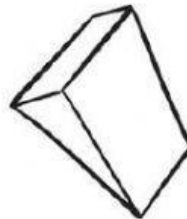
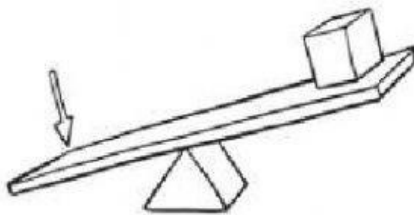
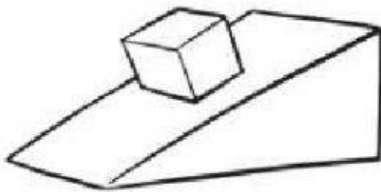
wedge

lever

pulley

ramp

screw



2. Match the simple machines and their definitions.

- | | |
|----------|--|
| Wheel • | • To lift and lower objects more easily. |
| Ramp • | • To move things along the ground. |
| Lever • | • To move objects along an inclined surface. |
| Pulley • | • To hold something in a place. |
| Wedge • | • To lower and raise very heavy objects. |
| Screw • | • To break something apart. |