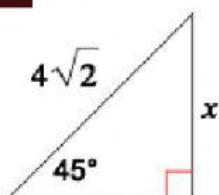


Special Right Triangles: 45-45-90 Practice

Find the value of x for each triangle

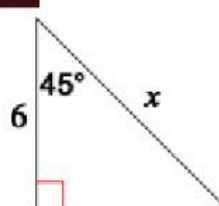
1.



Given:

Solve for:

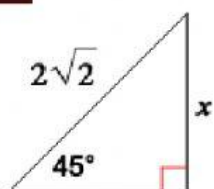
2.



Given:

Solve for:

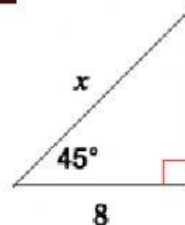
3.



Given:

Solve for:

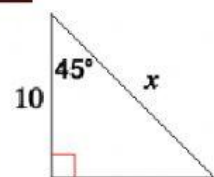
4.



Given:

Solve for:

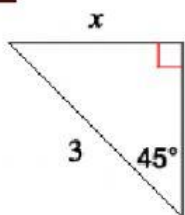
5.



Given:

Solve for:

6.



Given:

Solve for:
