

NOME \_\_\_\_\_

PROFESSORA ADRIANA LOPES

## VAMOS JUNTAR QUANTIDADES?

1 - JUNTE AS QUANTIDADES E ENCONTRE O TOTAL DE MAÇÃS.

$$\begin{array}{c} \text{🍏} \text{🍏} + \text{🍏} \text{🍏} \text{🍏} = \underline{\hspace{2cm}} \end{array}$$

$$\begin{array}{c} \text{🍏} + \text{🍏} \text{🍏} = \underline{\hspace{2cm}} \end{array}$$

$$\begin{array}{c} \text{🍏} \text{🍏} + \text{🍏} \text{🍏} = \underline{\hspace{2cm}} \end{array}$$

$$\begin{array}{c} \text{🍏} + \text{🍏} = \underline{\hspace{2cm}} \end{array}$$


$$\begin{array}{c} \text{🍏} \text{🍏} \text{🍏} \text{🍏} + \text{🍏} = \underline{\hspace{2cm}} \end{array}$$




QUANTAS MAÇÃS TEM NA ÁRVORE?



2 - ORGANIZE AS MAÇÃS EM ORDEM DECRESCENTE




3 - JUNTE AS QUANTIDADES E ENCONTRE O RESULTADO.



$$3 + 2 = \underline{\hspace{2cm}}$$




$$1 + 1 = \underline{\hspace{2cm}}$$




$$2 + 2 = \underline{\hspace{2cm}}$$



$$1 + 2 = \underline{\hspace{2cm}}$$



$$1 + 0 = \underline{\hspace{2cm}}$$



$$3 + 1 = \underline{\hspace{2cm}}$$