

Name: \_\_\_\_\_

Date: \_\_\_\_\_

# Area & Perimeter

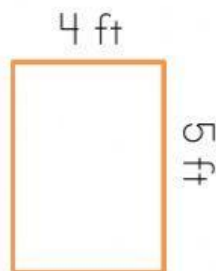
Find the area and perimeter of each polygon.

Write the number model to show how you got your answer.



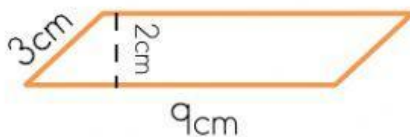
Area = \_\_\_\_\_

Perimeter = \_\_\_\_\_



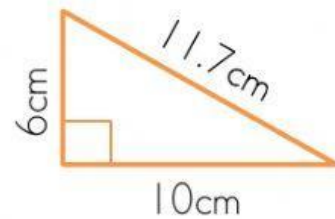
Area = \_\_\_\_\_

Perimeter = \_\_\_\_\_



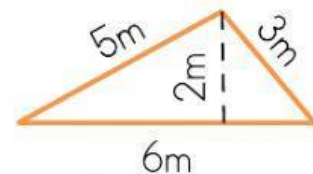
Area = \_\_\_\_\_

Perimeter = \_\_\_\_\_



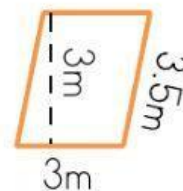
Area = \_\_\_\_\_

Perimeter = \_\_\_\_\_



Area = \_\_\_\_\_

Perimeter = \_\_\_\_\_



Area = \_\_\_\_\_

Perimeter = \_\_\_\_\_