

ESCOLA CLASSE 08 DE BRAZLÂNDIA

PROFESSORA: _____

ALUNO(A): _____


DATA: ____/____/____

ATIVIDADE

1) RESOLVA AS QUESTÕES:

- A) NINA TEM 5 BALINHAS E BEATRIZ TEM 4 BALINHAS. QUANTAS BALINHAS TÊM AS DUAS JUNTAS?


$$\underline{\quad\quad} + \underline{\quad\quad} = \underline{\quad\quad}$$



AS DUAS JUNTAS TÊM _____ BALINHAS.

- B) MATHEUS TINHA 3 FIGURINHAS E SEU PAI LHE DEU MAIS 10 FIGURINHAS. COM QUANTAS FIGURINHAS MATHEUS FICOU ?

$$\underline{\quad\quad} + \underline{\quad\quad} = \underline{\quad\quad}$$



MATHEUS FICOU COM _____ FIGURINHAS.

C) NA CESTA DE FRUTAS TEM 4 MAÇÃS. BRUNA VAI COLOCAR 2 MAÇÃS NA CESTA. QUANTAS MAÇÃS TEREMOS NA CESTA DE FRUTAS?



TEREMOS NA CESTA _____ MAÇÃS.

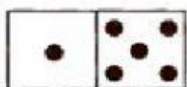
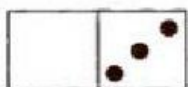
2) OBSERVE AS PEÇAS DO DOMINÓ E FAÇA AS ADIÇÕES.



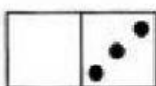
$$2 + 2 = 4$$



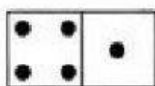
$$_____ + _____ = _____$$




$$_____ + _____ = _____ \quad _____ + _____ = _____ \quad _____ + _____ = _____$$



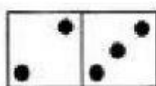
$$0 + 3 = 3$$



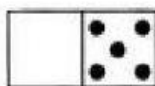
$$_____ + _____ = _____$$




$$_____ + _____ = _____$$




$$_____ + _____ = _____$$




$$_____ + _____ = _____$$



$$_____ + _____ = _____$$



$$_____ + _____ = _____$$



$$_____ + _____ = _____$$

