



**Answer the following math questions about blueberries!**




**1. How many blueberries are in my fruit salad?**




<b>14</b>	<b>20</b>	<b>17</b>
-----------	-----------	-----------

**2. Complete this pattern:**




		
---	---	---

**3. If there are 2 cups of blueberries in 1 pint, how many cups of blueberries would be in 3 pints?**



<b>6</b>	<b>9</b>	<b>3</b>
----------	----------	----------

**4. Look at the recipe below. How many cups of blueberries does this pie recipe call for?**

- 3 tablespoons cornstarch
- ¼ teaspoon salt 
- ½ teaspoon ground cinnamon
- 4 cups fresh blueberries
- 1 recipe pastry for a 9 inch double crust pie

<b>¼ cup</b>	<b>3 cups</b>	<b>4 cups</b>
--------------	---------------	---------------