

MATH QUIZ

1. Match the numbers with the correct name. (1 point)

1.000

5.000

7.000

10.000

3.000

Seven thousand

Ten thousand

Three thousand

Five thousand

One thousand

2. Put the numbers where they belong. (2.5 points)

3.152

Th

H

T

O

—

—

—

—

Partial 5

Third Grade

2.542

Th	H	T	O
—	—	—	—

8.916

Th	H	T	O
—	—	—	—

2.310

Th	H	T	O
—	—	—	—

1.003

Th	H	T	O
—	—	—	—

3. Choose the correct answer. (1 point)

One thousand two hundred twenty

1.220

1.320

1.420

Four thousand one hundred ten

4.210

4.110

4.310

Five thousand five hundred

5.600

5.400

5.500

Nine thousand six hundred five

9.606

9.604

9.605

4. Check the following multiplications and put the correct answers. (2 points)

$2 \times 0 =$

$3 \times 3 =$

$2 \times 2 =$

$2 \times 3 =$

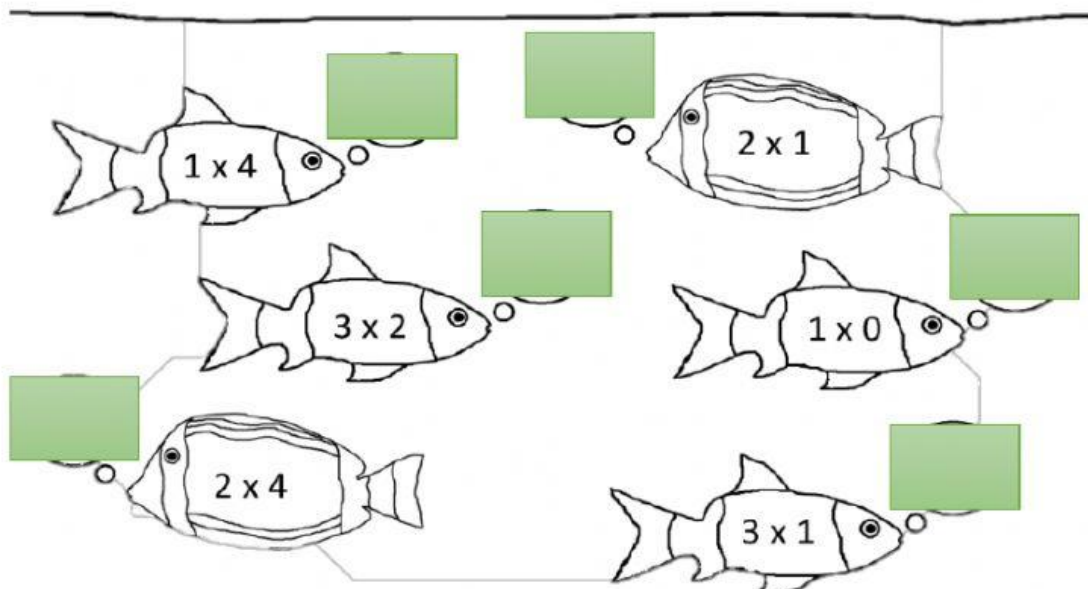
$2 \times 3 =$

$3 \times 10 =$

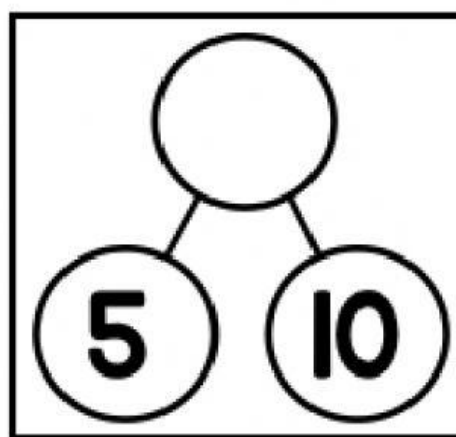
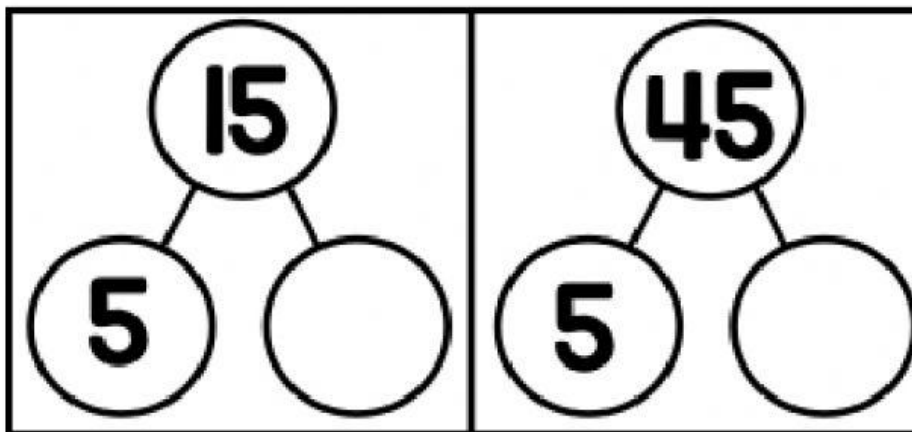

$1 \times 0 =$

$3 \times 5 =$

5. Put the answers of the following multiplications. (1.5 points)



6. Look at the following exercises. Then complete the circles with the correct numbers.
(1 point)



7. Look at the following numbers. Then put the correct exercise under each one to have the complete exercise. (1 point)

