

CLASS – V **SUB** - MATHS **CHAPTER** – SHAPES & ANGLES

NAME: _____

ROLL NO: _____

❖ Types of Angles

There are majorly six types of angles in Geometry. Match the names of all angles with their properties from the bracket:

(Full Rotation, Reflex Angle, Obtuse Angle,
Right Angle, Straight Angle, Acute Angle)

❖ It lies between 0° to 90°



❖ It lies between 90° to 180°



❖ The angle which is exactly equal to 90°



❖ The angle which is exactly equal to 180°




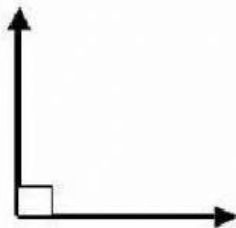
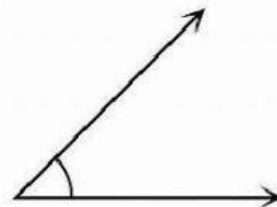
❖ The angle which is greater than 180° and less than 360°



❖ The complete rotation of angle equal to 360°



★ Name the angles: Acute Angle, Obtuse Angle,
Right Angle, Straight Angle



Made by: Mr. Ketul Kapadia