
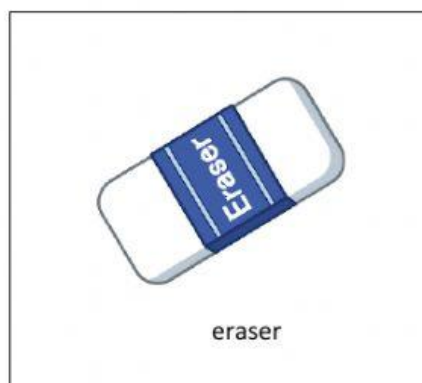


 Manahej	Science Department	Terms 2 Quiz 3
	Grade 3	Characteristics of Gases
		Total score: 5

Exercise 1:

Write "G" under the picture that shows gas. (1.5 points)


☐

☐

☐

☐

☐

Exercise 2:

Observe document 1 and document 2 then answer the following questions. (2 points)



Document 1: Air in beach floater



Document 2: Air in an air balloon

1. **Pick out** the title of document 1.

- a. Air in a balloon
- b. Air in beach floater
- c. A black wheel

2. **Identify** the shape of air:

a. In the beach floater is

round. ○

oval. ○

b. In the air balloon is

round. ○

oval. ○

3. **Conclude.** Air:

has a proper shape.

takes the shape of the container.

Exercise 3: (1.5 points)

Tick the boxes that show the characteristics of gases.

- ☐ Gases have a proper shape.
- ☐ Gases take the shape of the container.
- ☐ Gases have an invariable volume.
- ☐ Gases do not have a determined volume.
- ☐ Gases are compressible.
- ☐ Gases are incompressible.