










You gave the CASHIER: 	Your total: 	Equation: 	What is your change?
	2.00	$5 - 2 =$	a.
	1.25	$5 - 1.25 =$	b.
	5.00	$10 - 5 =$	c.
	2.45	$10 - 2.45 =$	d.
	12	$20 - 12 =$	e.
	10.25	$10 - 10.25 =$	f.
In order to calculate <u>CHANGE</u> , you must...			g.