





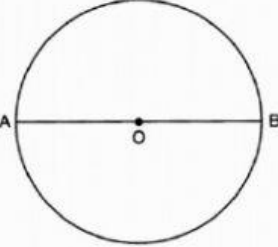



MATH WORKSHEET- SHAPES - THINK ROOM 4

Select the object according to the description given:

<div style="border: 1px solid black; padding: 5px; width: fit-content; margin: 0 auto;">QUADRILATERAL</div>	 <small>Dart</small>	
<div style="border: 1px solid black; padding: 5px; width: fit-content; margin: 0 auto;">CONCENTRIC CIRCLES</div>		
<div style="border: 1px solid black; padding: 5px; width: fit-content; margin: 0 auto;">SYMMETRIC OBJECT</div>		
<div style="border: 1px solid black; padding: 5px; width: fit-content; margin: 0 auto;">RADIUS OF A CIRCLE</div>		
<div style="border: 1px solid black; padding: 5px; width: fit-content; margin: 0 auto;">CHORD OF A CIRCLE</div>	