


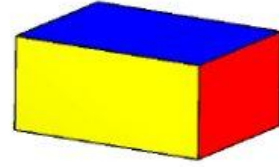


Pakistan International School, Jeddah
Cambridge Curriculum Section (CCS)
Second Term (Session 2020-21)

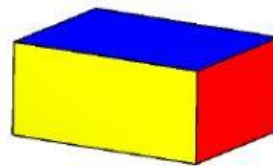

Subject: Mathematics
Grade: 1

Topic: Unit 11 3D Shapes
Revision Worksheet

A) Write the name of each 3D shape.



B) Select the shapes that can roll.



C) Solve the riddles.

1) I have 6 flat faces. What 3d shape am I?

2) I have 2 flat faces and 1 curved face. What 3D shape am I?

D) Write the correct 3D shape in the boxes.

1) Ice cream is the example of

2) Pipe is the example of

3) Dice is the example of

4) Book is the example of

5) Planet Earth is the example of

E) Describe each 3D shape by writing the number of faces.

3D shape	Flat face	Curved Face	Total number of faces
