



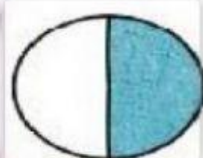

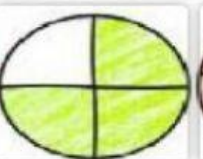
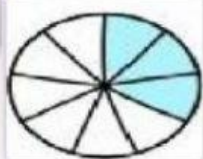









# FRAÇÃO

Organize a fração referente a parte pintada.  
Arraste e organize.

 $\frac{3}{9}$  $\frac{3}{6}$  $\frac{8}{9}$  $\frac{4}{5}$  $\frac{3}{4}$  $\frac{1}{10}$  $\frac{1}{3}$  $\frac{4}{8}$  $\frac{5}{7}$  $\frac{3}{9}$  $\frac{3}{3}$  $\frac{1}{2}$ 

9º Marque a fração correta

	<input type="checkbox"/> $\frac{1}{2}$	<input type="checkbox"/> $\frac{1}{4}$	<input type="checkbox"/> $\frac{2}{3}$	<input type="checkbox"/> $\frac{3}{4}$
	<input type="checkbox"/> $\frac{1}{2}$	<input type="checkbox"/> $\frac{1}{4}$	<input type="checkbox"/> $\frac{2}{3}$	<input type="checkbox"/> $\frac{3}{4}$
	<input type="checkbox"/> $\frac{1}{2}$	<input type="checkbox"/> $\frac{1}{4}$	<input type="checkbox"/> $\frac{2}{3}$	<input type="checkbox"/> $\frac{3}{4}$
	<input type="checkbox"/> $\frac{1}{2}$	<input type="checkbox"/> $\frac{1}{4}$	<input type="checkbox"/> $\frac{1}{3}$	<input type="checkbox"/> $\frac{2}{3}$
	<input type="checkbox"/> $\frac{1}{2}$	<input type="checkbox"/> $\frac{1}{4}$	<input type="checkbox"/> $\frac{1}{3}$	<input type="checkbox"/> $\frac{2}{3}$
	<input type="checkbox"/> $\frac{1}{6}$	<input type="checkbox"/> $\frac{1}{5}$	<input type="checkbox"/> $\frac{3}{5}$	<input type="checkbox"/> $\frac{2}{3}$
	<input type="checkbox"/> $\frac{1}{2}$	<input type="checkbox"/> $\frac{1}{6}$	<input type="checkbox"/> $\frac{4}{6}$	<input type="checkbox"/> $\frac{1}{3}$