





# Math – Comparisons

How many more? How many fewer?

1. Look at the figures. Answer the questions

- How many **more**  than  are there?

\_\_\_\_\_ - \_\_\_\_\_ = \_\_\_\_\_

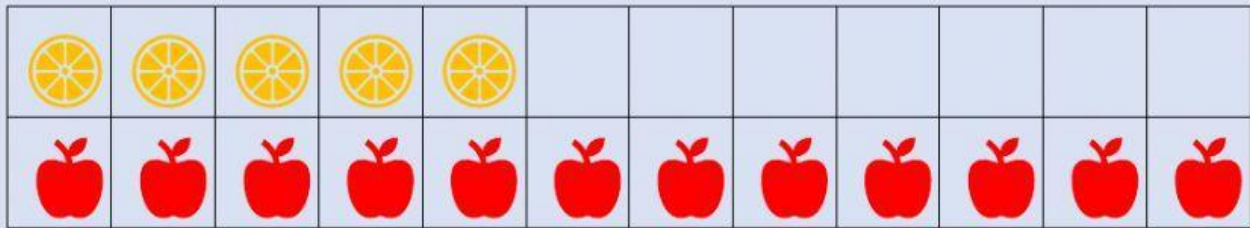
There are \_\_\_\_\_ more .

- How many **fewer**  than  are there?

\_\_\_\_\_ - \_\_\_\_\_ = \_\_\_\_\_


There are \_\_\_\_\_ fewer .

2. Look at the figures. Answer the questions




- How many **more**  than  are there?

\_\_\_\_\_ - \_\_\_\_\_ = \_\_\_\_\_



















There are \_\_\_\_\_ more .

- How many **fewer**  than  are there?

\_\_\_\_\_ - \_\_\_\_\_ = \_\_\_\_\_

There are \_\_\_\_\_ fewer .

3. Look at the figures. Answer the questions

- How many **more**  than  are there?

\_\_\_\_\_ - \_\_\_\_\_ = \_\_\_\_\_

There are \_\_\_\_\_ more .

- How many **fewer**  than  are there?

\_\_\_\_\_ - \_\_\_\_\_ = \_\_\_\_\_

There are \_\_\_\_\_ fewer .