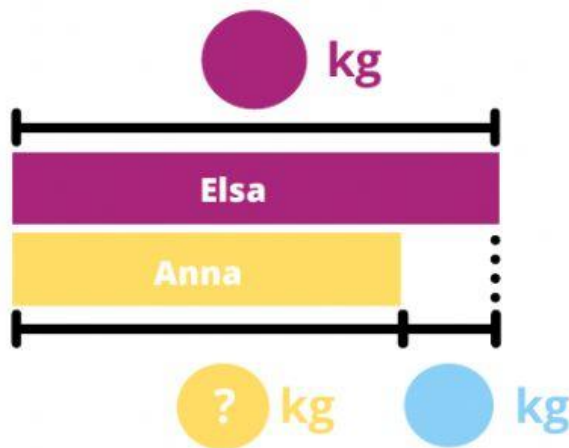


Name:

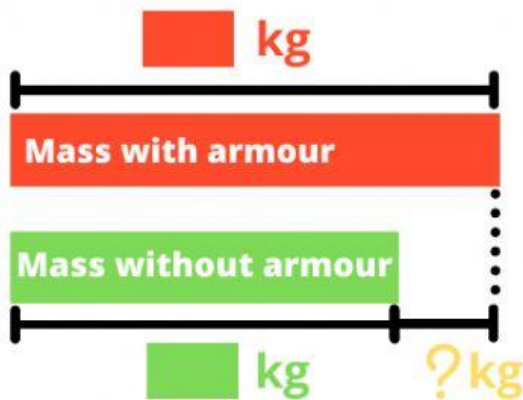
Grade :

Addition & Subtraction Of Mass

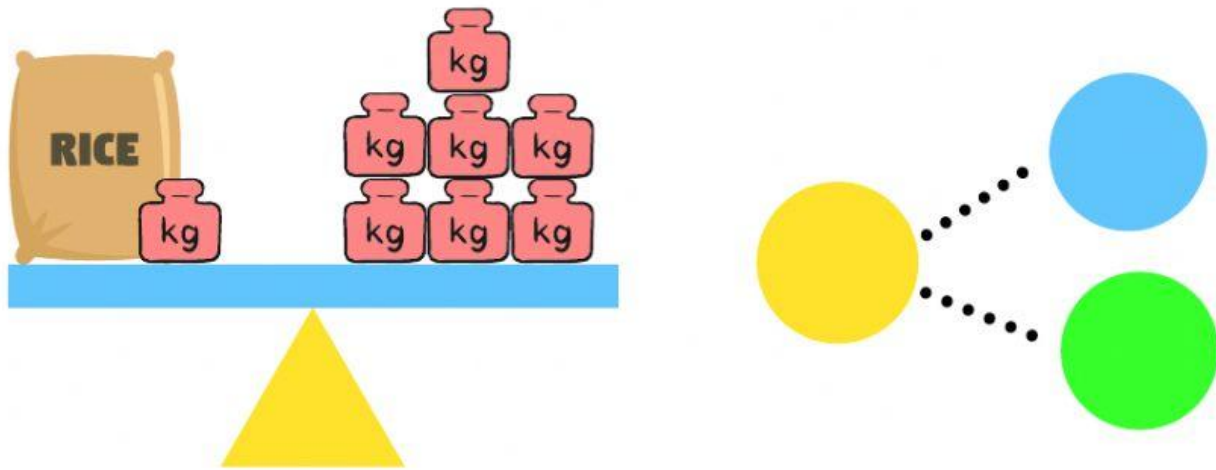
1. Elsa's mass is 53 kg.
Anna is 9 kg lighter than Elsa.
What is Anna's mass?



2. The mass of the knight in armour is 80 kg.
The mass of the knight without the armour is 61 kg.
What is the mass of the armour?



3. Look at the picture below



The sack of rice has a mass of

Use the chart to answer the questions.

NAME	DAD	MOM	KAYLA	KENT
MASS	75 kg	50 kg	22 kg	16 kg

a. How much heavier is Kayla than Kent?

b. What is the mass of both Dad and Kayla?

5. Masha has 76 kg of sugar.


She sells 32 kg in the morning and 15 kg in the evening.

How much sugar does Masha have left at the end of the day?



Masha sells  kg of sugar altogether.



Masha has  kg of sugar left at the end of the day.



YOU'RE
doing
Great

