



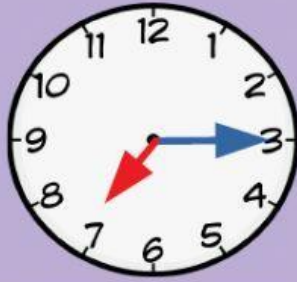
THE TIME



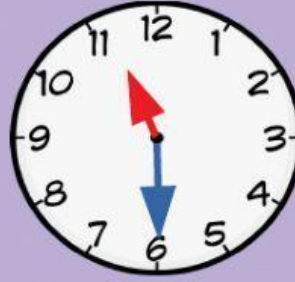
Match the time by dragging the correct answers on the space provided.



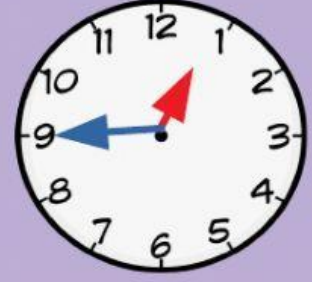
____ : ____



____ : ____



____ : ____



____ : ____

12:45

It's half past eleven.

11:30

It's three o'clock.

03:00

It's a quarter past seven.

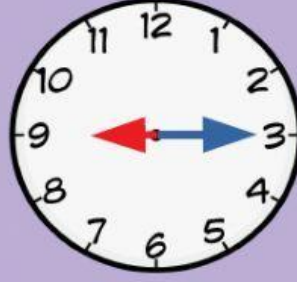
07:15

It's a quarter to one.

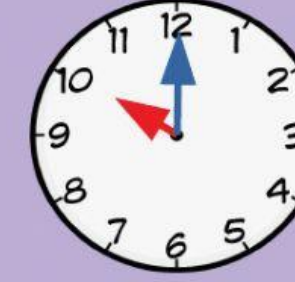
Match the time by dragging the correct answers on the space provided.



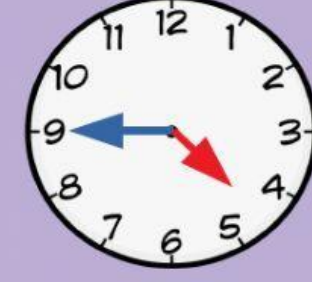
____ : ____



____ : ____



____ : ____



____ : ____

09:15

It's ten o'clock.

10:00

It's a quarter past nine.

04:45

It's half past six.

06:30

It's a quarter to five.