


Our Resources and the Economy

Q1) Choose the most appropriate answer:


a) Which of the following is not a capital resource?



b) Which resources are available naturally?

- i. Capital resources.
- ii. Natural resources.
- iii. Human resources.

c) Adnan is an architect. He designs bridges. Which type of resource is he?




- i. Human resource.

- ii. Capital resource.
- iii. Natural resource.

d) Which group is associated with capital resource?

- i. Machine, buildings, vehicles, tools.
- ii. Carpenter, doctor, teachers, architect
- iii. Fossil fuels, forest, gold, diamonds.

e) Ali came across certain machinery parts in the junkyard. He decided to use the parts for the robot he was building in school. The machinery parts would be classified as:



- i. Natural resources
- ii. Capital resources
- iii. Human resources.

f) On the way back from the junkyard, Ali came across a farmer milking his cows.

The farmer told him he needed some farm workers to start a dairy business. The farmer was looking for _____.

- i. Capital resources.
- ii. Natural resources.
- iii. Human resources.

g) Natural resources include _____.

- i. Buildings, forests, doctors.
- ii. Air, water and minerals.
- iii. Teachers, architects and doctors.

h) All man-made goods are classified as _____.



- i. Natural resources.
 - ii. Capital resources
 - iii. Human resources.
- i) Which of the following groups of resources do you need to set up a farm?
- i. Buildings, forests and computers.
 - ii. Land, animals, tractors.
 - iii. Workers, teachers and doctors.
- j) Ali decided to go to his school to see if he could identify the capital resources used there. Which group consists of the capital resources he could see in his school?



- i. Whiteboards, computers, laboratory equipment.

- ii. Balls, teachers and furniture.
- iii. Diamonds, oil and coal.