









CLASS-V
SCIENCE WORKSHEET (L-1)

Q.1- Name the following examples and how do they reproduce?

<p>(_____)</p> <p>1</p> 	<p>(_____)</p> <p>2</p> 
<p>(_____)</p> <p>3</p> 	<p>(_____)</p> <p>4</p> 
<p>(_____)</p> <p>5</p> 	<p>(_____)</p> <p>6</p> 
<p>(_____)</p> <p>7</p> 	<p>(_____)</p> <p>8</p> 

Q.2- Classify the following vegetables as SUMMER 'S' or WINTER 'W' -

Gourd <input type="text"/>	Cabbage <input type="text"/>	Peas <input type="text"/>	Brinjal <input type="text"/>
Pumpkin <input type="text"/>	Radish <input type="text"/>	Bean <input type="text"/>	Cauliflower <input type="text"/>

Q.3- Name the following using the help box-

WHEAT	MAIZE	UREA	GRAM
GRASSHOPPER	NITRATE	LOCUST	RICE

i) Two fertilizers- _____

ii) Two rabi crops- _____

iii) Two kharif crops- _____

iv) Two pests- _____