


# Problem Solving with Money



5 AED



10 AED




20 AED



16 AED



12 AED




7 AED



10 AED



9 AED



15 AED



12 AED



8 AED



12 AED



25 AED

# Problem Solving with Money

Solve the money problems below. Show your working out.

1. Salem bought bread, milk and tomatoes. How much money did he spend?

---

2. Sara bought chicken, orange juice and bananas. How much did she spend?

---

3. Nawaf bought apples, and bananas. How much did he spend?

---

4. Mahir bought 3 cupcakes and some orange juice. How much did he spend?

---

5. Reem bought three bunches of bananas, and a bunch of grapes. How much did she spend?

---

6. How many cupcakes can Muhammad buy with a 100 AED note? Show your working out.

---

7. Fauzea bought 3 bags of apples, and one bunch of grapes. How much **more** did she pay for the grapes than the apples?

---

## Challenge:

8. Shaika went to the shop and bought 3 items. She spend 28 AED. What 2 items might she have bought?

---

---

---

---

