




Name: \_\_\_\_\_

					
	Cone	Cylinder	prism	pyramid	sphere
# of vertices					
# of edges					
# of faces					

1. This shape has 2 faces: \_\_\_\_\_.
2. This shape has 12 edges: \_\_\_\_\_.
3. This shape doesn't have any vertices, edges, or faces:  
\_\_\_\_\_.
4. This shape has 1 face and no edges or vertices: \_\_\_\_\_.
5. These shapes have no vertices or edges: \_\_\_\_\_,  
\_\_\_\_\_, and \_\_\_\_\_.
6. These shapes have the same number of vertices as faces:  
\_\_\_\_\_ and \_\_\_\_\_.