



Makassed Philanthropic
Islamic Association of Beirut
Omar Bin Al Khattab College

Name: _____

Date: _____



Class: KG3

Subject: Math



Below Level: Group A

Learning Expectation: Solve addition equations

Count and solve the equation



$$3 + 5 =$$



$$2 + 4 =$$



Makassed Philanthropic
Islamic Association of Beirut
Omar Bin Al Khattab College

$$2+4=$$