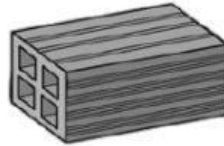


1. Write the materials.

glass	stone	brick	plastic	cotton	wool
-------	-------	-------	---------	--------	------













2. Classify the words from activity 1.

NATURAL MATERIALS	MAN-MADE MATERIALS
_____	_____
_____	_____
_____	_____

3. Write sentences about the materials using natural or man-made.

Cotton is a natural material.

Brick is a _____ material.

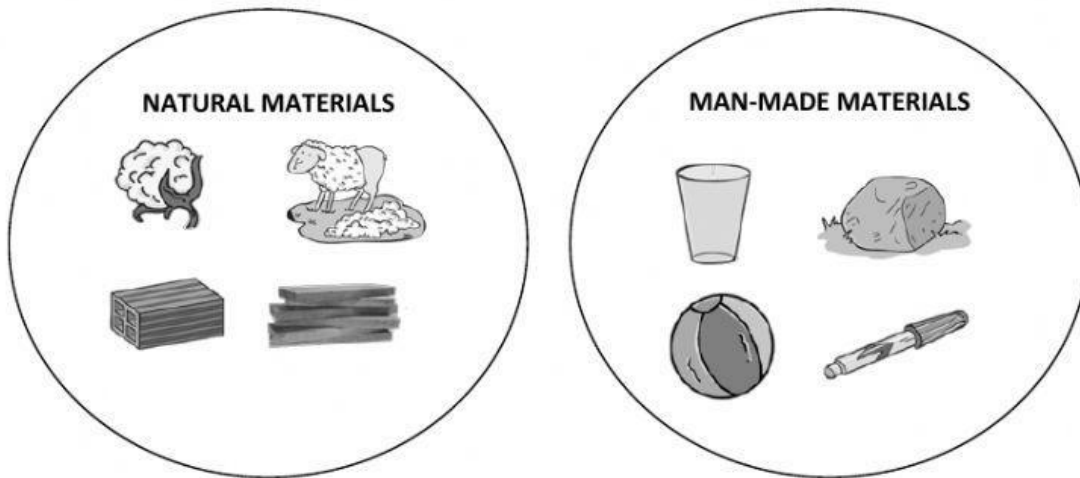
Stone _____.

_____.

_____.

_____.

4. Find the odd one out in each group.



5. Complete the sentences.

wool	wood	cotton	trees	cotton flowers	sheep
------	------	--------	-------	----------------	-------



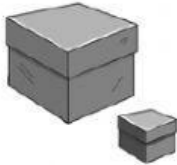
6. Complete the sentences using these words.

animals	humans	plants	ground
---------	--------	--------	--------

Natural materials come from _____, _____ or the _____.

Man-made materials are made by _____.

1. Write mass or volume.



_____ is the space matter occupies.



_____ is how heavy matter is.

2. Complete the sentences.

apple



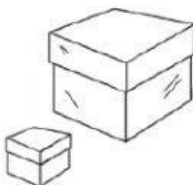
balloon




The _____ has more volume than the _____.

The _____ has more mass than the _____.


3. Read and colour.



The box with the bigger volume.



The box with the bigger mass.



The animal with the smaller mass.


4. Match the pictures where water is in the same state.



5. Write the state of water in each picture.



6. Classify.



SOLID	LIQUID	GAS
_____	_____	_____
_____	_____	_____