
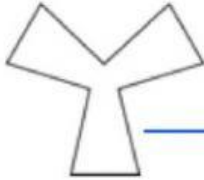


GRADE FOUR MILLER-CAMPBELL POLYGON ASSESSMENT


1. Say wheather each are polygon or non-polygon

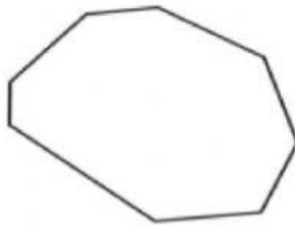





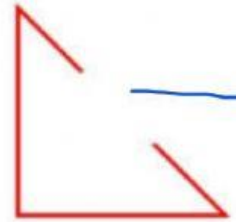










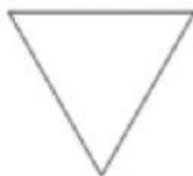


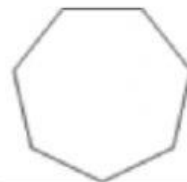
2. What are three properties of polygons?

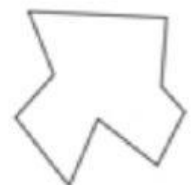
- _____
- _____
- _____

3. Label the polygon as regular or irregular.









4. Drag and Drop

Regular polygons

irregular polygons

- Has equal sides and angles _____
- Has unequal sides and angles _____

5. Quadrilateral means a shape has _____ sides.

6. Identify the quadrilaterals with a tick ✓

