



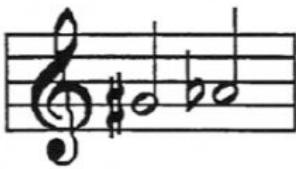
Name: \_\_\_\_\_

## Lesson 52

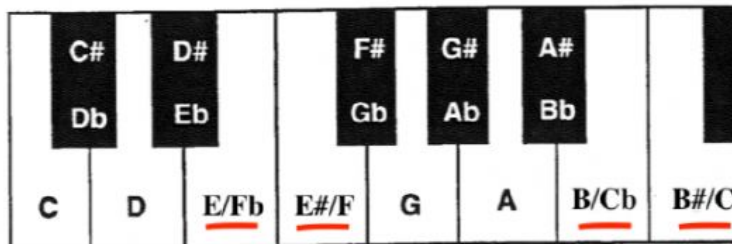
# Sharp  
b Flat

# ENHARMONIC TONES

Notes which differ in name but **sound the same** are called **Enharmonic Tones**. For example:

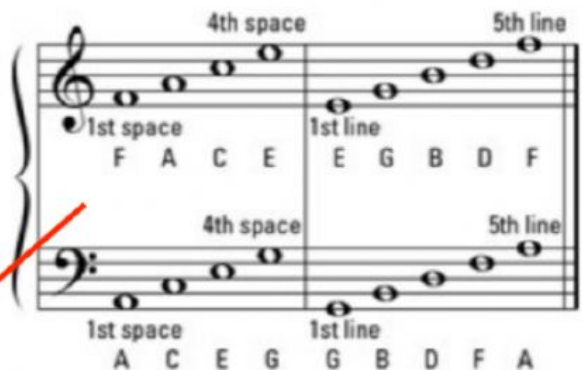


In the piano keyboard below, notice that several notes have more than one name.



1. Given the note in column one, write the equivalent enharmonic tone in column two. Include all necessary sharps and flats.

Column One	Column Two
C#	<u>Db</u>
F#	_____
Bb	_____
Eb	_____
E#	_____
B	_____



2. Write the name of each note in the space provided.

