

## Telling Time – Pretest

1. On Saturday Naomi gets up at 8 o'clock. Select the clock that shows 8 o'clock.



2. On Saturday Louis goes to soccer practice at 8:30. Select the clock that shows half past 8.



3. Mason takes his dog for a walk at 1:30. Select the clock that shows half past 1.



4. Julia eats lunch at 12 o'clock. Select the clock that shows noon.



5. Lucas has P.E. at 1:30. Select the clock that shows half past one



6.



This clock shows:

9 o'clock

12 o'clock

12:45

7.



This clock shows:




5 past 12

1 o'clock

noon

8.

Sophia and Alana can go on a ride at 4:00. Which clock shows 4:00?



9.

What time is shown on the clock?

☐ 1:00

☐ 12:30

☐ 1:30



10.



Marybeth draws the hands on the clock to show 6:30. What number will the minute hand point to?



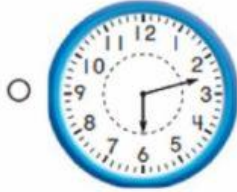
4

6

12

11.

Which clock shows 2:30?



12.

What is the time? [TEKS 1.7.E](#)

☐ 7:00

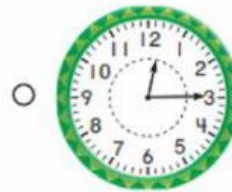


☐ half past 7:00

☐ 8:00



13.

Mary goes to art class at 12:15. Which clock shows this time?



14.

**Representations** Which digital clock shows the same time as the clock to the right?



15.

Ricardo is having dinner at 6:15. Which clock shows this time?

