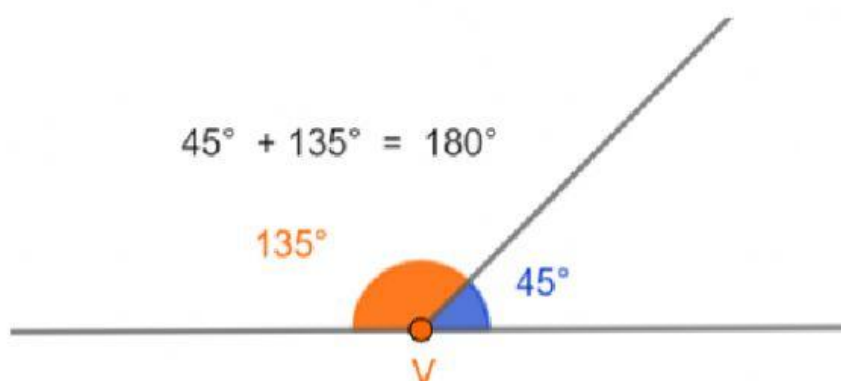


ANGOLI SUPPLEMENTARI bis

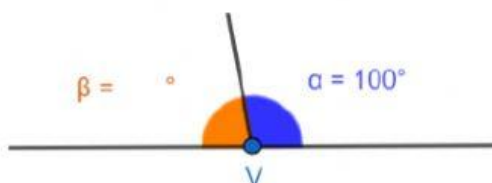
di Anna Nuovo



Due ANGOLI sono **SUPPLEMENTARI** se la loro somma è un **ANGOLO PIATTO**

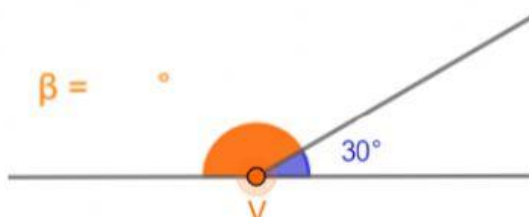
SE $\alpha = 45^\circ$
 $\beta = 180^\circ - 45^\circ = 135^\circ$

Determina l'ampiezza dell'angolo supplementare a quello dato:



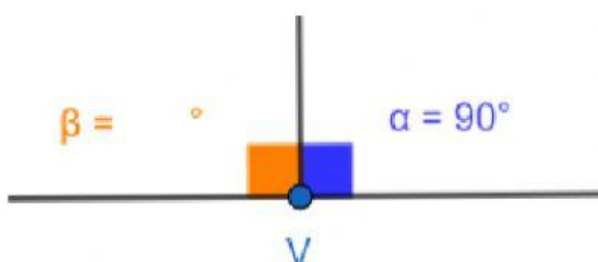
$\alpha = 100^\circ$

$\beta = 180^\circ - \circ = \circ$



$\alpha = 30^\circ$

$\beta = \circ - \circ = \circ$



$\alpha = 90^\circ$

$\beta = \circ - \circ = \circ$