



Life International School

Group 10, Mondul 03, Sangkat 02 Sihanoukville, Cambodia

Email: lifeinternationalschool@gmail.com Website: life.edu.kh

NAME: _____










Grade: 1 B

Subject: Math

Day /Date: Tuesday, 20, April 2021

Teacher: Monic Luppah

Solve the following problem.

		WORKING OUT
1)	Newton has 15  . Frazer has 12  . What is the difference? _____	
2)	There are 17  . 10  fly away. How many  are left? _____	
3)	A shop has 16  . 8  are sold. What is 16 minus 8? _____	
4)	Captain reads 18  . Tyger reads 4  . How many more books has Captain read? _____	
5)	I have \$20. I spend \$8. How much money do I have left? \$_____	