
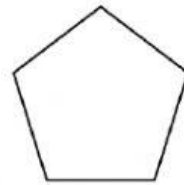
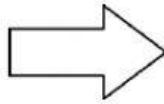
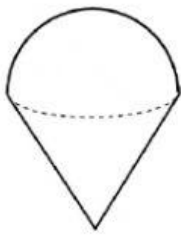
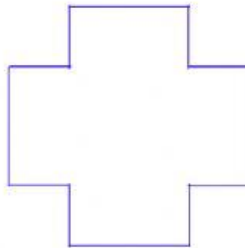


Name:

Date:

Write down the number of line(s) of symmetry for each of the following images.





Write down the order of rotational symmetry and the angle of rotational symmetry for each of the following images.


1.



(a) order of rotational Symmetry

(b) angle. of rotational Symmetry

2.



(a) order of rotational Symmetry

(b) angle. of rotational Symmetry


3.



(a) order of rotational Symmetry

(b) angle. of rotational Symmetry

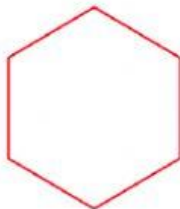
4.



(a) order of rotational Symmetry

(b) angle. of rotational Symmetry

5.



(a) order of rotational Symmetry

(b) angle. of rotational Symmetry