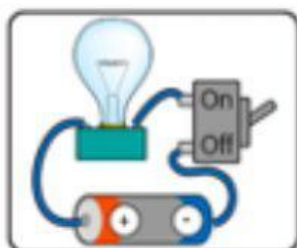
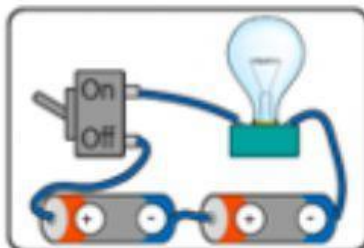
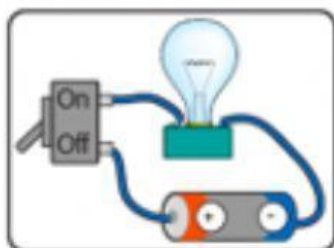




Do the lamps light in this circuit? Give mark (✓) for yes and (X) for no!



Will the bulb be on or off in these circuits? Why?

