






Create/Solve Equation with One Variable
Assessment
Point/Check your answer.


A + B = C  use manipulatives or calculator to solve 

Mary Beth and Danielle are planting tiger lilies at the flower shop.

A  Mary Beth plants **3** tiger lilies.

B  Danielle plants **2** tiger lilies.

C  How many tiger lilies do they plant **altogether**?



Write the equation:

A		B	=	C

1. To create the equation what number is A?

A=3

A=2

A=5

2. To create the equation what number is B?

B=3

B=2

B=5

3. To solve the equation what is the answer for C?

C=3

C=2

C=5