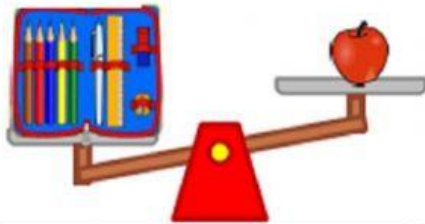




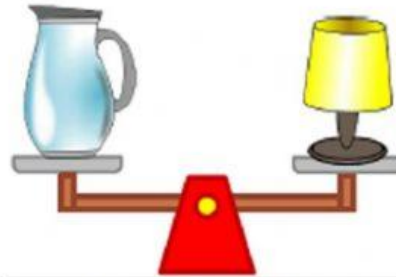
**LITERACY, NUMERACY, LIFE SKILLS**  
**MATH E-LEARNING ASSIGNMENT**

Name: \_\_\_\_\_ Grade: \_\_\_\_\_ Date: \_\_\_\_\_

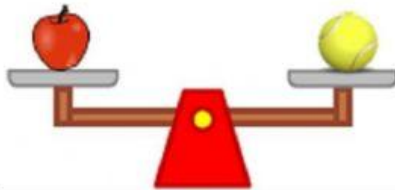
Select the correct answer



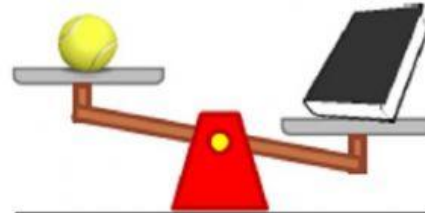
The pencil case weighs  
\_\_\_\_\_ the apple.



The pitcher weighs  
\_\_\_\_\_ the lamp.



The tennis ball weighs  
\_\_\_\_\_ the apple.



The tennis ball weighs  
\_\_\_\_\_ the book.



The lamp weighs  
\_\_\_\_\_ the book.



The pencil case weighs  
\_\_\_\_\_ the book.

Which one is heavier: pitcher or pencil case?

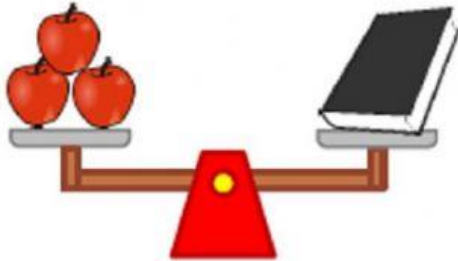
\_\_\_\_\_

Which one is lighter: book or apple?


\_\_\_\_\_




**LITERACY, NUMERACY, LIFE SKILLS**  
**MATH E-LEARNING ASSIGNMENT**



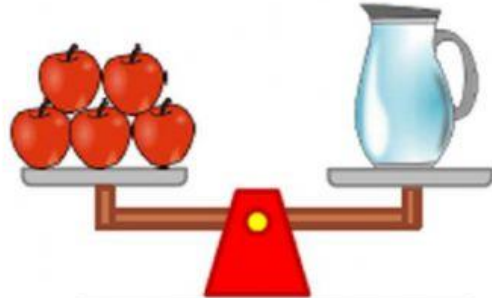
The weight of the book  
in apples is    3   .



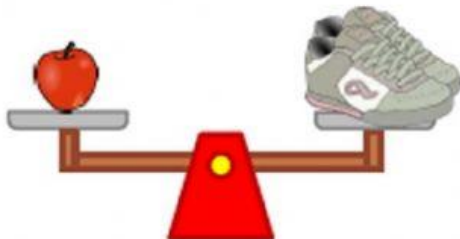
The weight of the table  
lamp in apples is       .



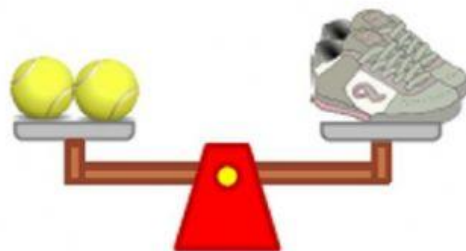
The weight of the pencil case  
in apples is       .



The weight of the pitcher  
in apples is       .



The weight of the trainers  
in apples is       .



The weight of the trainers  
in tennis balls is       .

Which object is the heaviest? \_\_\_\_\_

Which one is heavier, an apple or a tennis ball? \_\_\_\_\_